

Name : _____

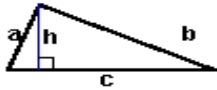
Score : _____

Teacher : _____

Date : _____

Identify and Calculate the Area and Perimeter for each Triangle.

1)



$a = 4.27 \text{ ft}$ $b = 9.21 \text{ ft}$
 $c = 9.8 \text{ ft}$ $h = 4 \text{ ft}$

Area: _____

Perimeter: _____

Type: _____

2)



$a = 7.4 \text{ inches}$ $b = 4.8 \text{ inches}$
 $c = 8.82 \text{ inches}$

Area: _____

Perimeter: _____

Type: _____

3)



$a = 5.71 \text{ mm}$ $b = 8.49 \text{ mm}$
 $c = 8.4 \text{ mm}$ $h = 5.4 \text{ mm}$

Area: _____

Perimeter: _____

Type: _____

4)



$s = 5.9 \text{ yds}$

Area: _____

Perimeter: _____

Type: _____

5)



$a = 8.6 \text{ ft}$ $b = 4.3 \text{ ft}$
 $c = 9.62 \text{ ft}$

Area: _____

Perimeter: _____

Type: _____

6)



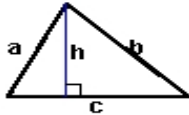
$a = 4.5 \text{ cm}$ $b = 6.4 \text{ cm}$

Area: _____

Perimeter: _____

Type: _____

7)



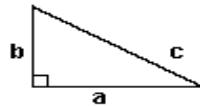
$a = 6.33 \text{ yds}$ $b = 8.16 \text{ yds}$
 $c = 8.6 \text{ yds}$ $h = 5.7 \text{ yds}$

Area: _____

Perimeter: _____

Type: _____

8)



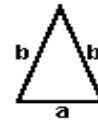
$a = 8.2 \text{ cm}$ $b = 5 \text{ cm}$
 $c = 9.6 \text{ cm}$

Area: _____

Perimeter: _____

Type: _____

9)



$a = 4 \text{ inches}$ $b = 6.7 \text{ inches}$

Area: _____

Perimeter: _____

Type: _____