


Name _____




part part WHOLE

Finish the ways to make each number.


7



5




8




_____ and _____ _____ and _____ _____ and _____


4



9



6



_____ and _____ _____ and _____ _____ and _____

This was: Easy Just Right Hard
(Circle one)