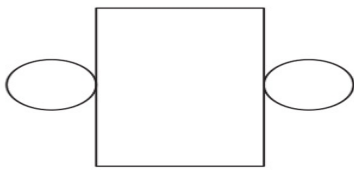


# 3D SHAPES AND NETS


Name the 3D shape formed by each net.

Name: \_\_\_\_\_

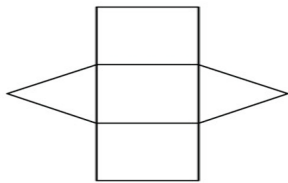
Date: \_\_\_\_\_



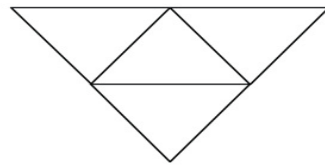
\_\_\_\_\_



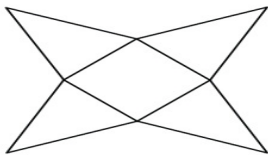
\_\_\_\_\_



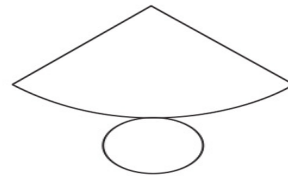
\_\_\_\_\_



\_\_\_\_\_



\_\_\_\_\_



\_\_\_\_\_