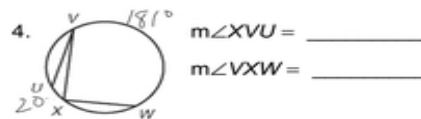
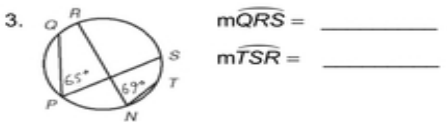
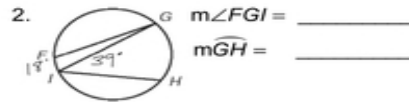



LESSON **Practice B**
11-4 **Inscribed Angles**

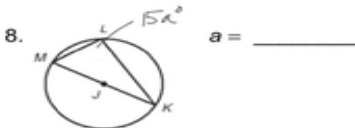
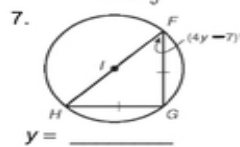
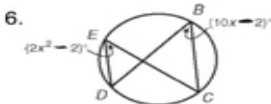
Find each measure.



5. A circular radar screen in an air traffic control tower shows these flight paths. Find $m\angle LNK$.



Find each value.



Find the angle measures of each inscribed quadrilateral.

