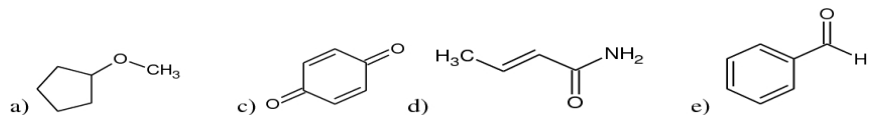
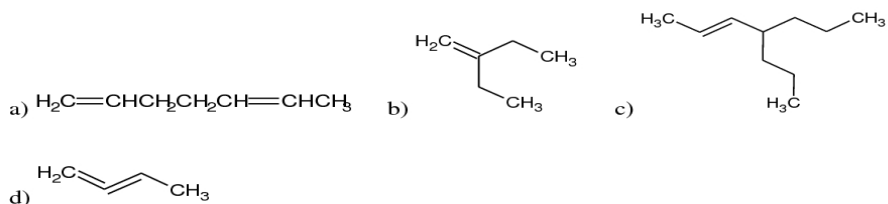


Worksheet #3: Chapter 3

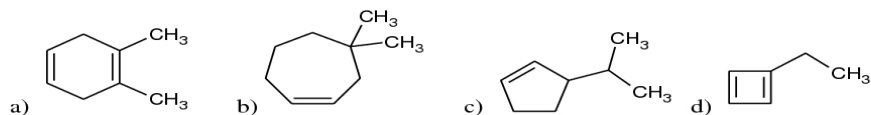
1. Identify the functional groups in each of the following molecules:



2. Give IUPAC names for the following compounds:



3. Name the following cycloalkenes:



4. Draw structures corresponding to the following IUPAC names:

a) 3-Ethyl-2,2-dimethylhept-3-ene

b) 3-Propylhept-2-ene

c) Octa-1,5-diene