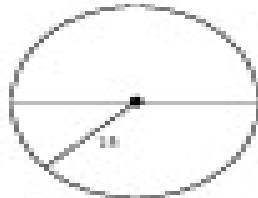
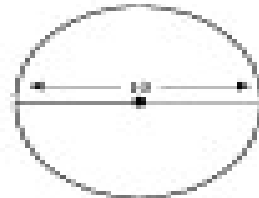


Find the circumference of each circle. Leave answers in terms of π .

1)



2)



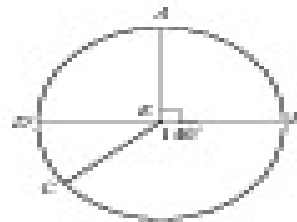
Find the measure of each arc in $\odot C$.

1) \widehat{AD}

2) \widehat{BC}

3) \widehat{CAD}

4) \widehat{CB}



$\odot F$ has a radius of 6. Find the length of each arc.

1) \widehat{AD}

2) \widehat{BC}