







## Easter Graphing Fun

Find the Easter items and write the coordinates as shown.



-  is at C, 6
-  is at \_\_\_\_\_, \_\_\_\_\_
-  is at \_\_\_\_\_, \_\_\_\_\_
-  is at \_\_\_\_\_, \_\_\_\_\_
-  is at \_\_\_\_\_, \_\_\_\_\_

-  is at \_\_\_\_\_, \_\_\_\_\_
-  is at \_\_\_\_\_, \_\_\_\_\_
-  is at \_\_\_\_\_, \_\_\_\_\_
-  is at \_\_\_\_\_, \_\_\_\_\_
-  is at \_\_\_\_\_, \_\_\_\_\_
-  is at \_\_\_\_\_, \_\_\_\_\_