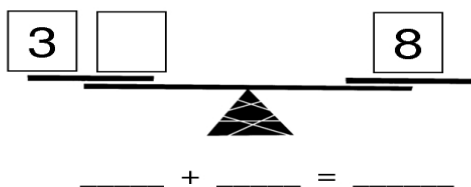


Maths – Year 2 – Unit 2 – Day 9
Send-in task

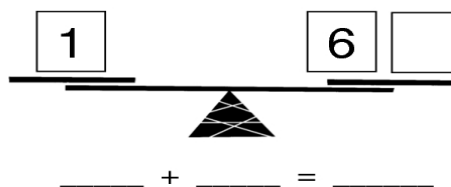
Balancing Addition Equations

Write the missing number to make the scales balance. Then write a matching number sentence.

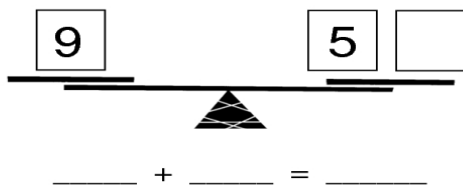
1.



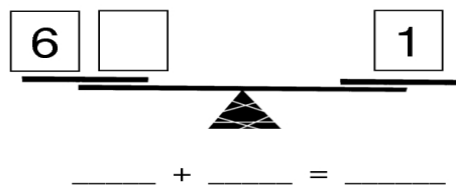
2.



3.

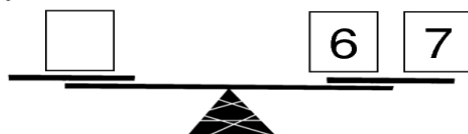


4.

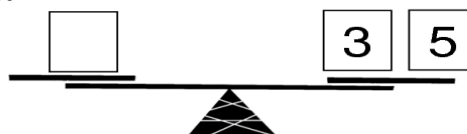


Write the missing numbers to make these true

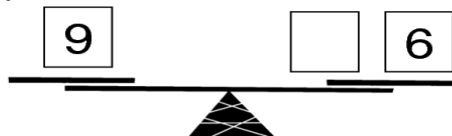
5.



6.



7.



8.

