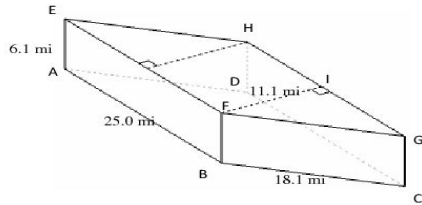


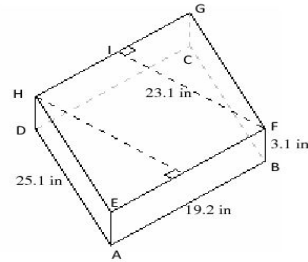
Volume and Surface Area of Parallelogram Prisms (B)

Instructions: Find the volume and surface area for each parallelogram prism.

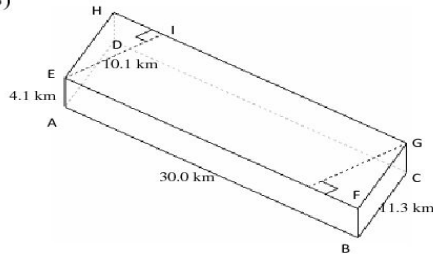
1)



2)



3)



4)

