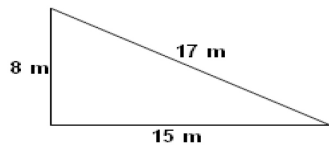


Student Name: _____

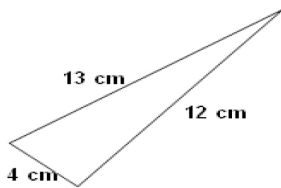
Score: _____

Is it Right Angled Triangle?

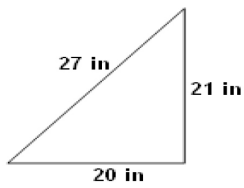
Check whether the given triangles are right angled triangle using Pythagorean rule:
Work Space



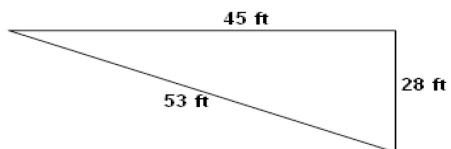
Answer:



Answer:



Answer:



Answer: