

NAME _____


AREA AND VOLUME

DATE _____


AREAS, VOLUME

Piled High

Find the volume of each box. Then write your answers in the book below.



Volume = _____




Volume = _____




Volume = _____



Volume = _____



Volume = _____



Volume = _____



Volume = _____



Volume = _____

