

Geometry Quiz

Name _____

cone

sphere


pyramid

rectangular prism

cylinder

cube

1.




Shape _____


Real-life object _____

2. Shape _____

Real-life object _____



3.



Shape _____

Real-life object _____

4. Shape _____

Real-life object _____

