





Equations



Circle the correct number sentence.

 $2 + 3 = 10$ <u>$4 + 3 = 7$</u> $4 - 3 = 1$	 $2 + 4 = 6$ $2 + 3 = 5$ <u>$5 - 3 = 2$</u>
---	--





Circle the correct addition sentence.

 $3 + 2 = 7$ $3 + 2 = 5$ $3 - 2 = 1$	 $4 + 2 = 6$ $5 - 1 = 4$ $3 + 1 = 6$
--	---

Circle the correct subtraction sentence.

 $3 + 3 = 6$ $3 - 3 = 0$ $6 - 3 = 3$	 $6 - 2 = 4$ $6 + 2 = 8$ $4 - 2 = 2$
---	---

Circle the correct number sentence.

 $9 - 3 = 6$ $3 - 3 = 2$ $6 - 3 = 3$	 $5 - 2 = 3$ $2 + 5 = 7$ $7 - 5 = 2$
 $6 - 4 = 2$ $4 + 2 = 6$ $6 + 2 = 8$	 $5 - 1 = 4$ $4 + 5 = 9$ $9 - 4 = 5$