

Name: _____


Date: _____

Make 10!


Find the number that will make 10, and then write the addition number sentence.



$$\underline{\quad} + \underline{\quad} = 10$$



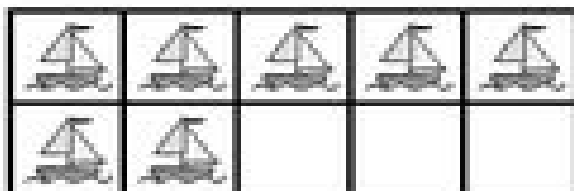
$$\underline{\quad} + \underline{\quad} = 10$$



$$\underline{\quad} + \underline{\quad} = 10$$



$$\underline{\quad} + \underline{\quad} = 10$$



$$\underline{\quad} + \underline{\quad} = 10$$



$$\underline{\quad} + \underline{\quad} = 10$$