

Name _____



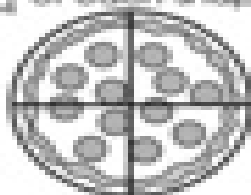
Fraction
Fourth

Tasty Toppings



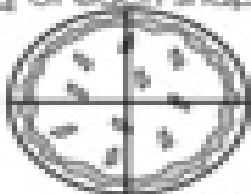
Read and do.



Color $\frac{1}{4}$ of each shape.



Color $\frac{1}{4}$ of each shape.



Write a fraction for the shaded part of each shape.

