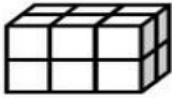
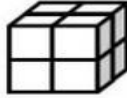
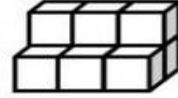


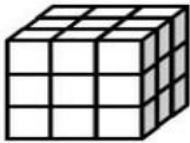
Volume


Write the volume of each shape. Be sure to label each answer with cubic units.

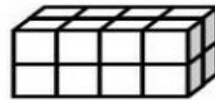


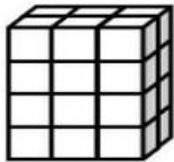





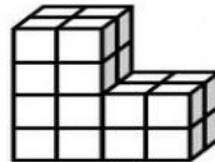















Color the figure with the greatest volume.



Monster by Krista Wallden

©Hooty's Homeroom