

Name : _____

Score : _____

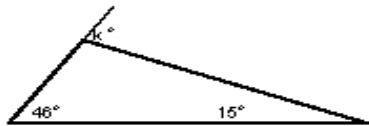
Teacher : _____

Date : _____

Exterior Angle Theorem

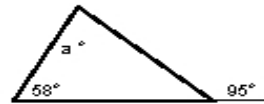
Solve for the given variable.

1)



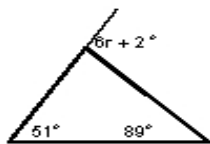
$k = \underline{\hspace{2cm}}$

5)



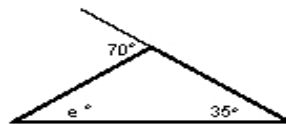
$a = \underline{\hspace{2cm}}$

2)



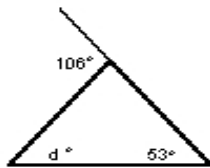
$r = \underline{\hspace{2cm}}$

6)




$e = \underline{\hspace{2cm}}$

3)



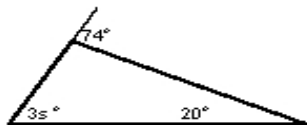
$d = \underline{\hspace{2cm}}$

7)



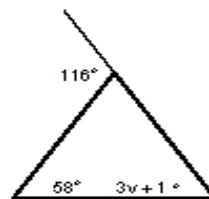
$n = \underline{\hspace{2cm}}$

4)



$s = \underline{\hspace{2cm}}$

8)



$v = \underline{\hspace{2cm}}$

