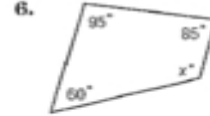
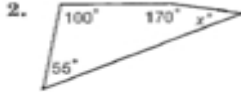
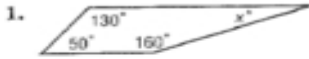


6-4

Practice: Skills

Classifying Quadrilaterals

Find the value of x in each quadrilateral.



Classify each quadrilateral using the name that *best* describes it.

