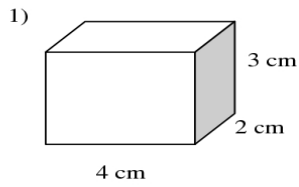


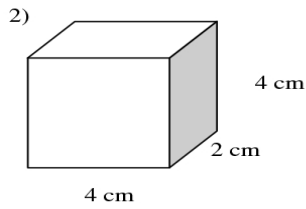
Name _____

VOLUME OF A RECTANGULAR PRISM #1

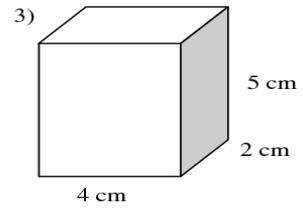
Directions: Find the volume of each prism below. The formula to calculate the volume of a rectangular prism is volume = length x width x height. Write your answer in the space provided.



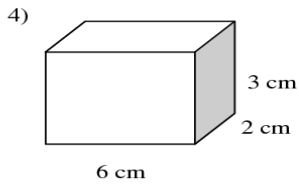
Area _____



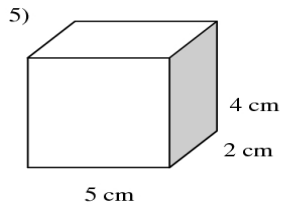
Area _____



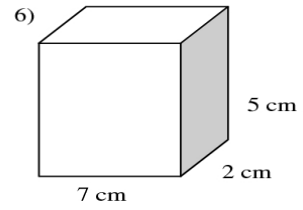
Area _____



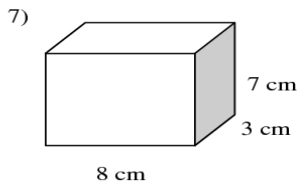
Area _____



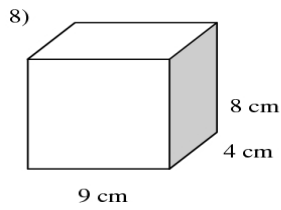
Area _____



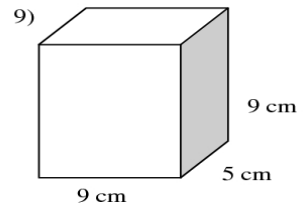
Area _____



Area _____



Area _____



Area _____