













Name _____

Who Took the Cookies?

To find out which bear ate the cookies, solve each subtraction problem. The bear with the numeral 5 in the difference took the cookies.

Who ate the cookies? _____

 $\begin{array}{r} 72 \\ - 59 \\ \hline \end{array}$ 	 $\begin{array}{r} 92 \\ - 88 \\ \hline \end{array}$ 	 $\begin{array}{r} 37 \\ - 19 \\ \hline \end{array}$ 
---	---	---

 $\begin{array}{r} 62 \\ - 25 \\ \hline \end{array}$ 	 $\begin{array}{r} 58 \\ - 42 \\ \hline \end{array}$ 	 $\begin{array}{r} 25 \\ - 14 \\ \hline \end{array}$ 
--	--	--