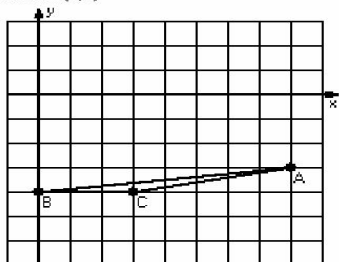


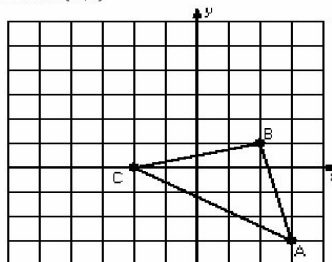
Translations (A)

Instructions: Draw and label the translated image for each triangle.

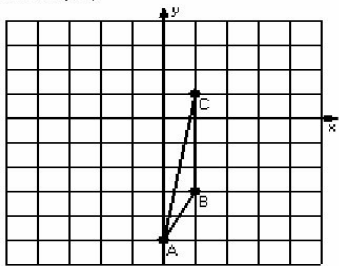
1) Translation $(0,5)$



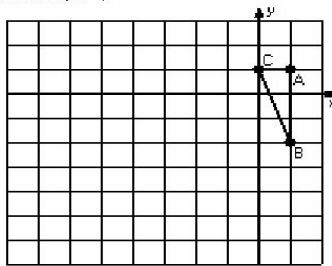
2) Translation $(-2,0)$



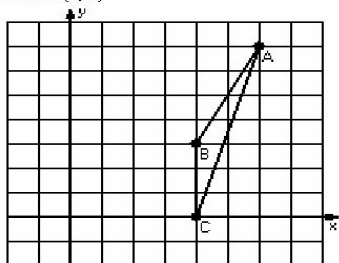
3) Translation $(3,1)$



4) Translation $(-5,-4)$



5) Translation $(0,-1)$



6) Translation $(4,5)$

