
















Name: \_\_\_\_\_

### Basic Addition Worksheet with Sum to 5

Count and write the correct number in the box.

 <input type="text" value="3"/>	+	 <input type="text" value="1"/>	=	 <input type="text" value="4"/>
 <input type="text"/>	+	 <input type="text"/>	=	 <input type="text"/>
 <input type="text"/>	+	 <input type="text"/>	=	 <input type="text"/>
 <input type="text"/>	+	 <input type="text"/>	=	 <input type="text"/>
 <input type="text"/>	+	 <input type="text"/>	=	 <input type="text"/>