


Name \_\_\_\_\_

# Stolen Number Patterns (1)

Those pesky leprechauns have are up to mischief again! They've stolen some numbers in the number pattern! On each shamrock, write the missing number. Then use words to describe how you knew what the missing number was. Good luck!

1. 2            6      8      10      12      14

---



---

2. 0      3      6            12      15      18

---



---

3. 2      3                  6      7      8

---





---

4. 5            15            25      30      35

---



---

5. 7            9      10            12      13

---



---