


# Fractions:

Write the fraction for the shaded part.




Write the fraction for the shaded part.	$\frac{2}{5}$	$\frac{1}{3}$	$\frac{3}{4}$
---	---------------	---------------	---------------


Write the fraction.




Write the fraction.




Write the fraction.



Write the fraction.



Write the fraction.



Write the fraction.

