





TELLING THE TIME


A. WRITE DOWN THE TIME SHOWN ON EACH CLOCK.



B. SELECT THE CORRECT TIME.



It's a quarter past three.



It's half past eight.



It's twenty-five to eleven.



It's quarter past nine.



It's six o'clock.



It's five past two.