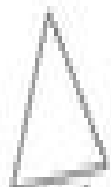





# Types of Triangle Worksheet

Name: \_\_\_\_\_


Look at three different examples:



**Equilateral** - all sides equal. Can also be an isosceles.



**Right Angle** - has a right angle. Can also be a scalene or isosceles.



**Scalene** - all sides different.



**Isosceles** - has two sides equal.

Date: \_\_\_\_\_

Write the type of triangle



\_\_\_\_\_



\_\_\_\_\_



\_\_\_\_\_



\_\_\_\_\_



\_\_\_\_\_



\_\_\_\_\_



\_\_\_\_\_



\_\_\_\_\_



\_\_\_\_\_



\_\_\_\_\_



\_\_\_\_\_