



How many apples are there?



The apple weighs as much


as _____ apple.

Does an apple float or sink?



The apple is _____

apple size.



Our first line

Apple

Apple

Apple

An Apple