

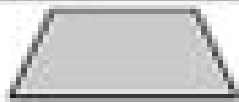








Name: \_\_\_\_\_ Date: \_\_\_\_\_

4.G.2

## Quadrilaterals & Triangles

**Directions:** Name & describe each shape.

 <p>Name: _____ Description: _____ _____ _____</p>	 <p>Name: _____ Description: _____ _____ _____</p>	 <p>Name: _____ Description: _____ _____ _____</p>
 <p>Name: _____ Description: _____ _____ _____</p>	 <p>Name: _____ Description: _____ _____ _____</p>	 <p>Name: _____ Description: _____ _____ _____</p>
 <p>Name: _____ Description: _____ _____ _____</p>	 <p>Name: _____ Description: _____ _____ _____</p>	 <p>Name: _____ Description: _____ _____ _____</p>