







Name: _____

Time Worksheet: Match clocks and times

What time is shown? Mark with X in the box of the correct time.

 <input type="checkbox"/> 6:00 <input type="checkbox"/> 7:00 <input type="checkbox"/> 8:00 <input type="checkbox"/> 9:00	 <input type="checkbox"/> 2:00 <input type="checkbox"/> 3:00 <input type="checkbox"/> 4:00 <input type="checkbox"/> 5:00
 <input type="checkbox"/> 7:00 <input type="checkbox"/> 8:00 <input type="checkbox"/> 9:00 <input type="checkbox"/> 10:00	 <input type="checkbox"/> 7:00 <input type="checkbox"/> 8:00 <input type="checkbox"/> 9:00 <input type="checkbox"/> 10:00
 <input type="checkbox"/> 11:00 <input type="checkbox"/> 12:00 <input type="checkbox"/> 13:00 <input type="checkbox"/> 14:00	 <input type="checkbox"/> 1:00 <input type="checkbox"/> 2:00 <input type="checkbox"/> 3:00 <input type="checkbox"/> 4:00