

Name: \_\_\_\_\_


Calculate the change from 10p




If you paid for each of the items below with a ten pence coin,  
how much change would you be given?



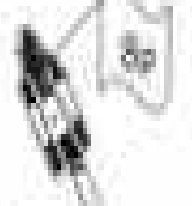
Change = \_\_\_\_\_



Change = \_\_\_\_\_



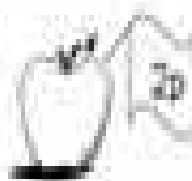
Change = \_\_\_\_\_




Change = \_\_\_\_\_



Change = \_\_\_\_\_



Change = \_\_\_\_\_



Change = \_\_\_\_\_



Change = \_\_\_\_\_



Change = \_\_\_\_\_



Change = \_\_\_\_\_

