




Name _____ Date _____ # _____

Base Ten Addition and Subtraction 4.1

<p>1. Using pictures, words, or numbers, explain how you will add the numbers chosen here.</p> 	<p>1. Using pictures, words, or numbers, explain how you will add the numbers chosen here.</p> 
<p>_____</p>	<p>_____</p>
<p>2. Using pictures, words, or numbers, explain how you will add the numbers chosen here.</p> 	<p>2. Using pictures, words, or numbers, explain how you will add the numbers chosen here.</p> 
<p>_____</p>	<p>_____</p>