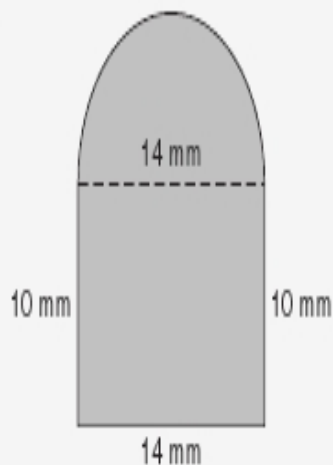


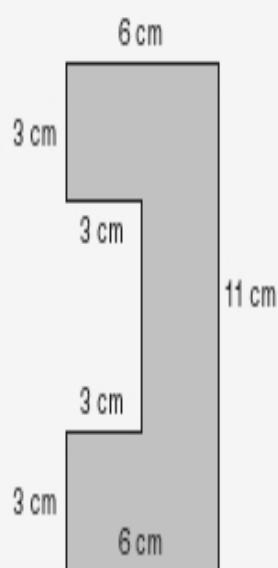
Practice

Find the area of each figure to the nearest tenth, if necessary.

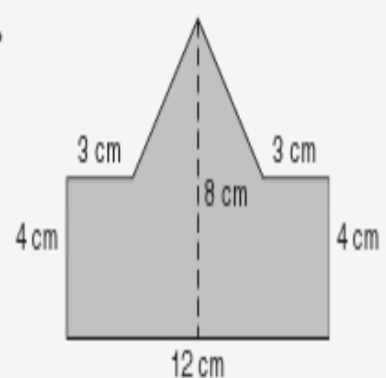
1.



2.



3.



4. **Standardized Test Practice** Which of the following has the same area as the figure shown?

A Square with $s = 5$ in.

C Triangle with $b = 6$ in. and $h = 9$ in.

B Rectangle with $\ell = 3$ in. and $w = 2.5$ in.

D Parallelogram with $b = 4$ in. and $h = 7$ in.

