

Name : _____

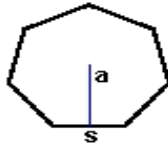
Score : _____

Teacher : _____

Date : _____

Identify and Calculate the Area and Perimeter for each Polygon.

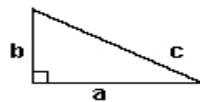
1)



$s = 3.4$ ft
 $a = 1.7$ ft

Area: _____
Perimeter: _____
Type: _____

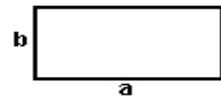
2)



$a = 8.2$ yds $b = 4.6$ yds
 $c = 9.4$ yds

Area: _____
Perimeter: _____
Type: _____

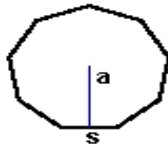
3)



$a = 8.9$ ft $b = 4.4$ ft

Area: _____
Perimeter: _____
Type: _____

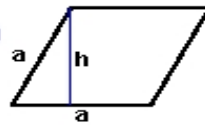
4)



$s = 3.3$ yds
 $a = 1.65$ yds

Area: _____
Perimeter: _____
Type: _____

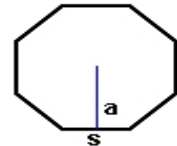
5)



$a = 6.6$ cm $h = 5.98$ cm

Area: _____
Perimeter: _____
Type: _____

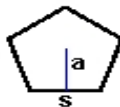
6)



$s = 7.6$ mm
 $a = 3.29$ mm

Area: _____
Perimeter: _____
Type: _____

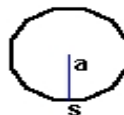
7)



$s = 5.4$ mm
 $a = 2.57$ mm

Area: _____
Perimeter: _____
Type: _____

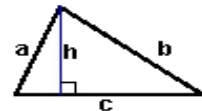
8)



$s = 2.5$ cm
 $a = 1.25$ cm

Area: _____
Perimeter: _____
Type: _____

9)



$a = 5.8$ inches $b = 8.68$ inches
 $c = 8.9$ inches $h = 5.4$ inches

Area: _____
Perimeter: _____
Type: _____