

# Elementary Math Worksheet

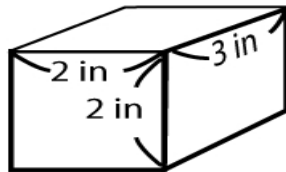
## 8th Grade Math Worksheet

Volume

NAME \_\_\_\_\_

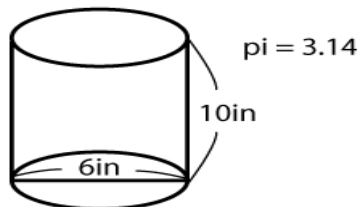
Find the volume of each shape below.

1.



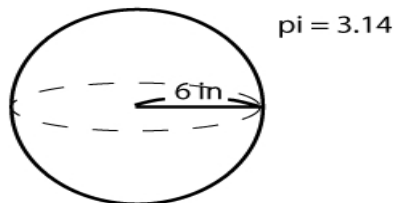
Answer: \_\_\_\_\_

2.



Answer: \_\_\_\_\_

3.



Answer: \_\_\_\_\_

