

Name _____

Date _____

Polly's Polygon Parlor

Each flavor of ice cream below includes a quadrilateral in its name. List the features of each quadrilateral on the ice-cream box. Use the list at the bottom of the page. Each time you use a feature, color a matching ice-cream scoop.



Rocky Rhombus Road

1. _____

2. _____

3. _____

4. _____

5. _____

6. _____

Strawberry Square Sorbet

1. _____

2. _____

3. _____

4. _____

5. _____

Toffee Trapezoid Crunch

1. _____

2. _____

3. _____

Raspberry Rectangle











1. _____

2. _____

3. _____

4. _____

5. _____

 4 sides	 1 set of parallel sides
 2 sets of parallel sides	 2 obtuse angles
 all sides are equal	 2 different sets of equal sides
 parallelogram	 2 acute angles
 4 right angles	 angles vary