





Name _____

Date _____

Period _____

Prisms and Pyramids

- Using toothpicks and clay, construct a 2-dimensional representation of each polyhedron. The toothpicks will represent the edges and the clay will represent the vertices.
- Name each polyhedron in the space provided.
- Count the number of vertices and edges.
- Sketch the base and lateral faces.
- Answer the questions that follow.

Polyhedron	# of vertices	# of edges	Sketch of base	Sketch of lateral faces
 Name _____				
 Name _____				
 Name _____				
 Name _____				