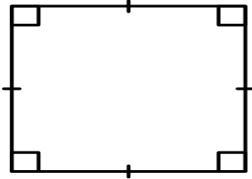


Name _____ Date _____



NAMING QUADRILATERAL

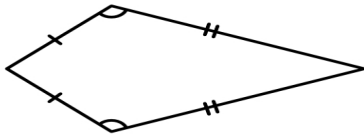
Use the properties of each quadrilateral to identify what it is and write the name.



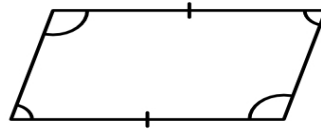
Shapes Name _____



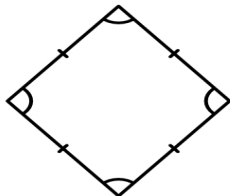
Shapes Name _____



Shapes Name _____



Shapes Name _____



Shapes Name _____



Shapes Name _____