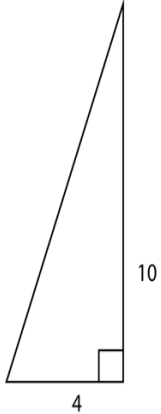
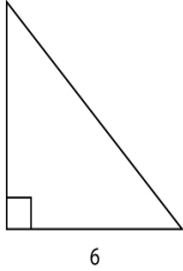
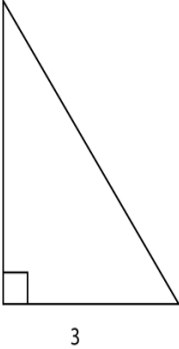

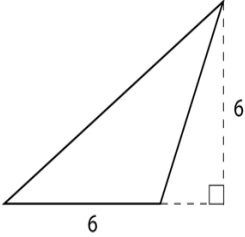
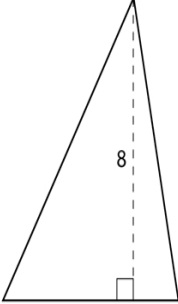
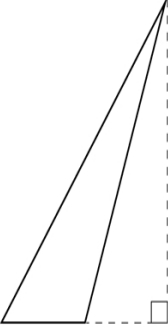
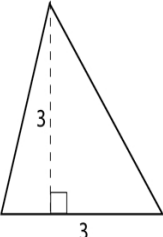


Name \_\_\_\_\_ Date \_\_\_\_\_

## Area of a Triangle Practice

Directions: Find the area of the triangles below.

|  |  |   |  |
|--|--|---|--|
| <p>①</p>  <p>_____ square units</p>   | <p>②</p>  <p>_____ square units</p>   | <p>③</p>  <p>_____ square units</p>   | <p>④</p>  <p>_____ square units</p>   |
| <p>⑤</p>  <p>_____ square units</p> | <p>⑥</p>  <p>_____ square units</p> | <p>⑦</p>  <p>_____ square units</p> | <p>⑧</p>  <p>_____ square units</p> |