

Name _____


Time: hour and half hour

Small Surprises


Write the time below each clock.
Use the answer box.

























Answer Box		
2:00	3:30	5:30
6:00	4:00	8:00
7:30	1:30	11:00
	10:30	