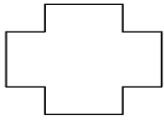


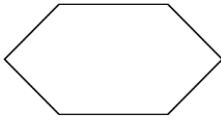
### Symmetry Sheet 1.

1) Draw on lines of symmetry on the following shapes.

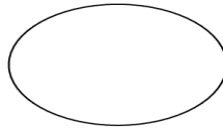
a)




b)



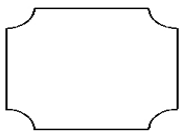
c)



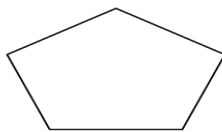
d)



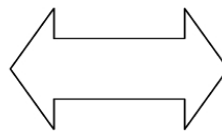
e)



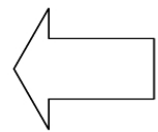
f)



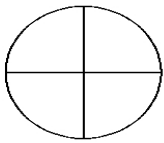
g)




h)



i)



j)




k)



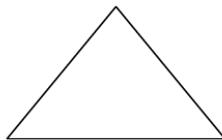
l)



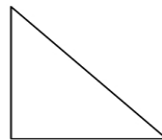
m)



n)



o)



p)

