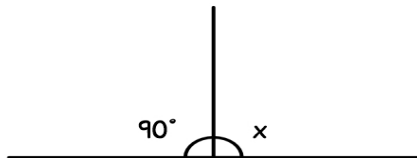


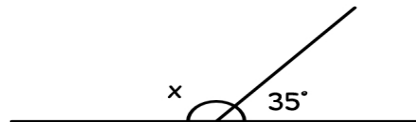
SUPPLEMENTARY ANGLES

Name _____ Date _____

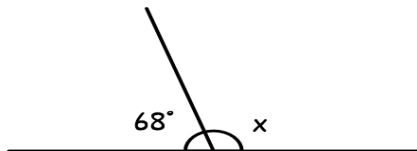
Look at these angles below and find x by subtracting 180° with the already known angles.




Find x !



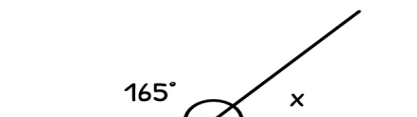
Find x !



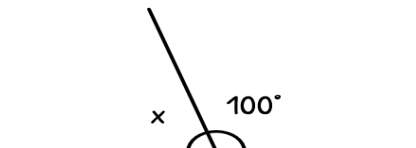
Find x !



Find x !



Find x !



Find x !