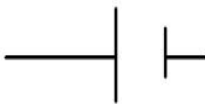
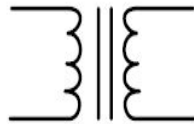

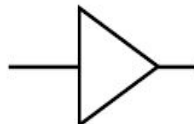


Identify the function of devices on a circuit board.

CELL**TRANSFORMER****RESISTORS****CAPACITORS****AMPLIFIERS****TRANSISTOR**