

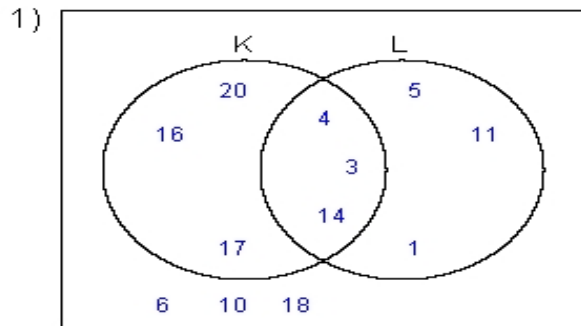
Name : _____

Score : _____

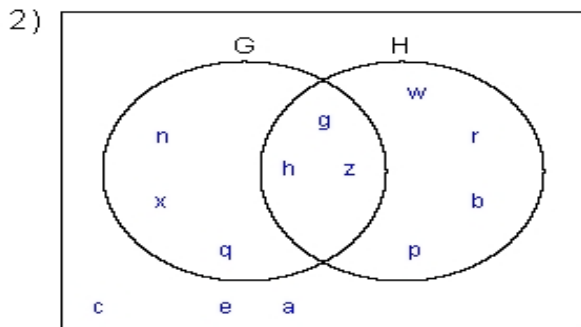
Teacher : _____

Date : _____

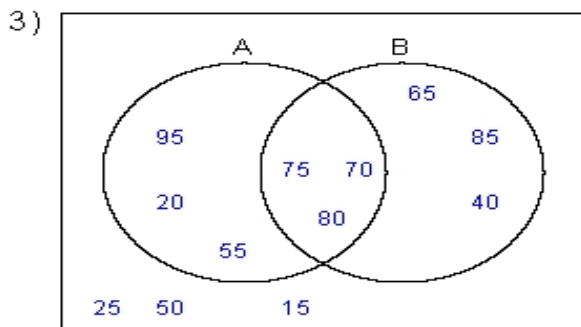
Solve the Problems Using the Venn Diagrams



$K' \cap L'$ = _____
 $L - K'$ = _____
 $L - K$ = _____
 K = _____



$G \cap H$ = _____
 $G' \cap H'$ = _____
 $H' - G'$ = _____
 $(G - H)'$ = _____



$A \cup B$ = _____
 B' = _____
 $B - A$ = _____
 $A' \cup B'$ = _____