


Name: _____

Date: _____


Lab Equipment Worksheet

Identify these laboratory equipments and write down their main functions:

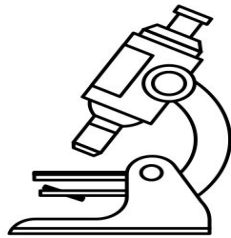
1



2



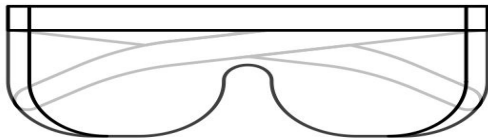
3



4



5



6

