


Name _____


fun With ARRAYS

Directions: Draw arrays for each equation.

I. $3+3+3+3=12$



B. $5+5+5=15$




C. $2+2+2+2=10$



D. $4+4=8$



E. $1+1+1+1+1=5$



F. $3+3+3=9$

