

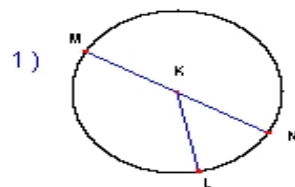
Name : _____

Score : _____

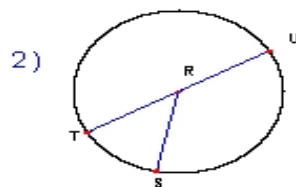
Teacher : _____

Date : _____

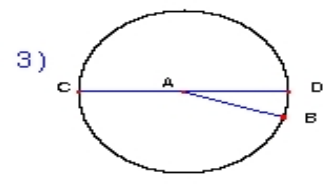
Identify the elements for each problem.



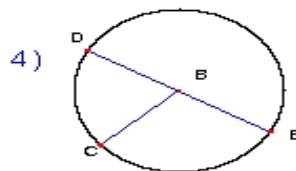
Circle: _____
Radius: _____
Diameter: _____



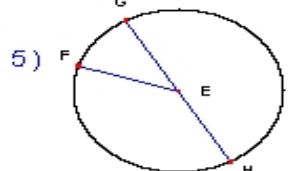
Circle: _____
Radius: _____
Diameter: _____



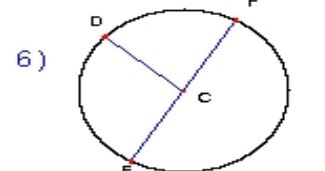
Circle: _____
Radius: _____
Diameter: _____



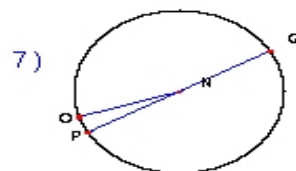
Circle: _____
Radius: _____
Diameter: _____



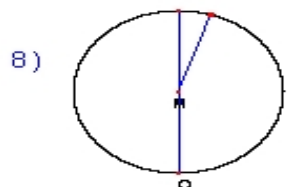
Circle: _____
Radius: _____
Diameter: _____



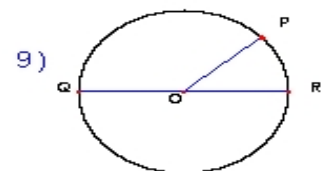
Circle: _____
Radius: _____
Diameter: _____



Circle: _____
Radius: _____
Diameter: _____



Circle: _____
Radius: _____
Diameter: _____



Circle: _____
Radius: _____
Diameter: _____