


What time is it?

Exercise 1: Write the time shown below each clock.




1. Quarter past 3




2.




3.



4.



5.



6.

Exercise 2: Write the digital times for each.

1. Quarter past 8 _____ 8:15
2. Five past 9 _____
3. Ten to 4 _____
4. Twenty five to 7 _____
5. Twenty past 3 _____
6. Half past 5 _____
7. Quarter to 8 _____
8. Twenty to 12 _____
9. Ten past 10 _____
10. Five to 10 _____