

**Exercise 1**


**Name the transportations below.**



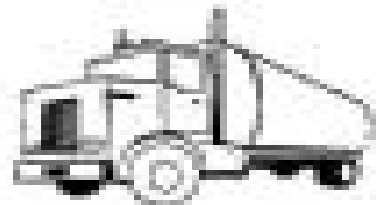
\_\_\_\_\_




\_\_\_\_\_




\_\_\_\_\_



\_\_\_\_\_



\_\_\_\_\_



\_\_\_\_\_

train	ship	truck
airplane	helicopter	car