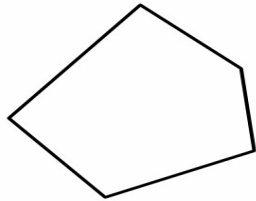


Name _____ Date _____

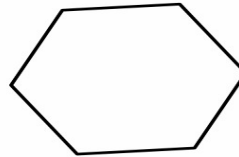
POLYGON SHAPES

Look at the pictures of polygon below, identify how many sides do they have and what polygon type they are.



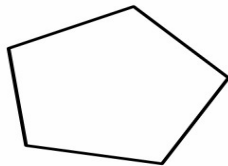
Number of sides: _____

Polygon type: _____



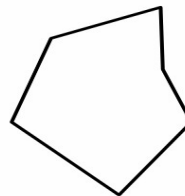
Number of sides: _____

Polygon type: _____



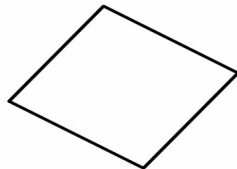
Number of sides: _____

Polygon type: _____



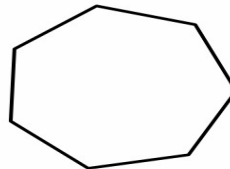
Number of sides: _____

Polygon type: _____



Number of sides: _____

Polygon type: _____



Number of sides: _____

Polygon type: _____