

Score

6

02-01-03-007-s

Name: \_\_\_\_\_

Subject: Year 2 Numeracy

Date: \_\_\_\_\_

Unit: 3-D shapes

Name the following 3-D shapes:

1)




\_\_\_\_\_

2)



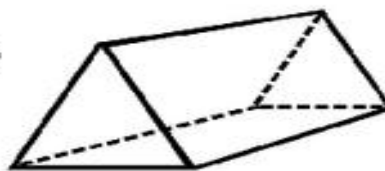
\_\_\_\_\_

3)



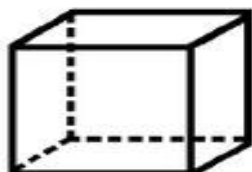
\_\_\_\_\_

4)



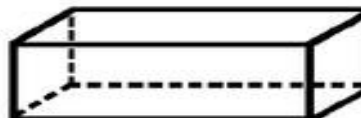
\_\_\_\_\_

5)



\_\_\_\_\_

6)



\_\_\_\_\_